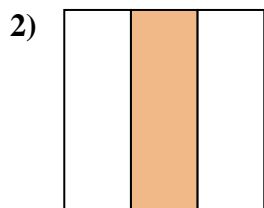




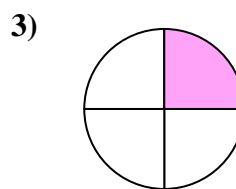
Determine which letter best describes the shaded portion.



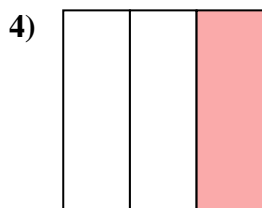
- A. one-quarter
- B.
- C. four-fourths



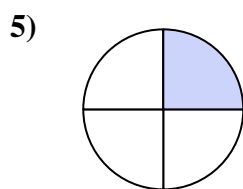
- A. four-fourths
- B. three-thirds
- C. two-fourths



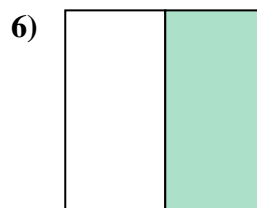
- A. two-fourths
- B.
- C.




- A.
- B. three-quarters
- C. two-quarters



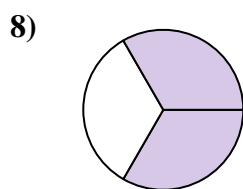
- A.
- B.
- C. one-half



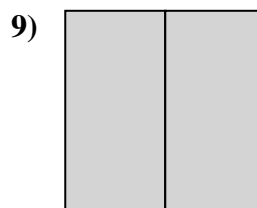
- A. two-halves
- B.
- C. one-half



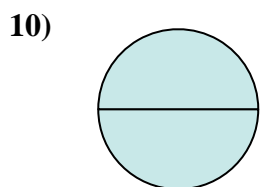
- A. two-fourths
- B.
- C. four-fourths



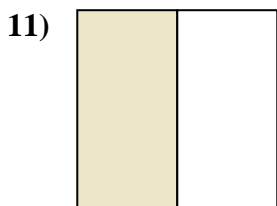
- A.
- B.
- C. one-fourth



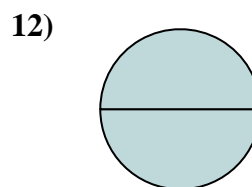
- A.
- B. two-halves
- C. two-fourths



- A.
- B. four-fourths
- C. two-halves



- A. one-fourth
- B. one-third
- C. four-quarters



- A. two-halves
- B.
- C. three-thirds

**Answers**

1. \_\_\_\_\_

2. \_\_\_\_\_

3. \_\_\_\_\_

4. \_\_\_\_\_

5. \_\_\_\_\_

6. \_\_\_\_\_

7. \_\_\_\_\_

8. \_\_\_\_\_

9. \_\_\_\_\_

10. \_\_\_\_\_

11. \_\_\_\_\_

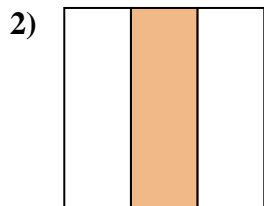
12. \_\_\_\_\_



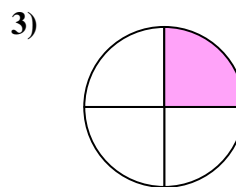
Determine which letter best describes the shaded portion.



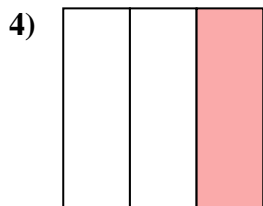
- A. one-quarter
- B.
- C. four-fourths



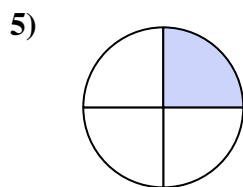
- A. four-fourths
- B. three-thirds
- C. two-fourths



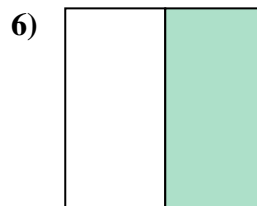
- A. two-fourths
- B.
- C.



- A.
- B. three-quarters
- C. two-quarters



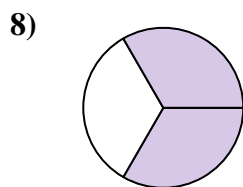
- A.
- B.
- C. one-half



- A. two-halves
- B.
- C. one-half



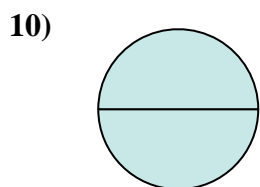
- A. two-fourths
- B.
- C. four-fourths



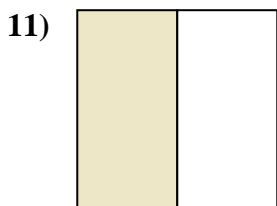
- A.
- B.
- C. one-fourth



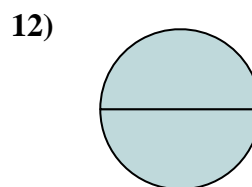
- A.
- B. two-halves
- C. two-fourths



- A.
- B. four-fourths
- C. two-halves



- A. one-fourth
- B. one-third
- C. four-quarters



- A. two-halves
- B.
- C. three-thirds

**Answers**

- 1.   **A**
- 2.   **B**
- 3.   **A**
- 4.   **B**
- 5.   **C**
- 6.   **C**
- 7.   **C**
- 8.   **C**
- 9.   **B**
- 10.   **B**
- 11.   **A**
- 12.   **C**